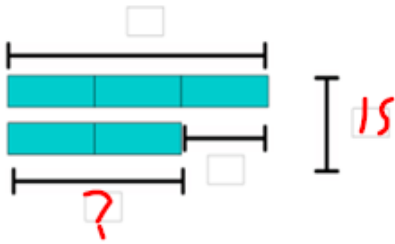
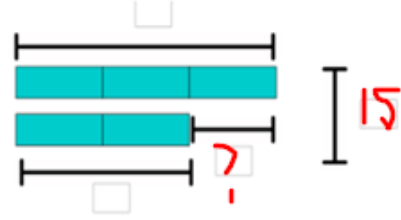


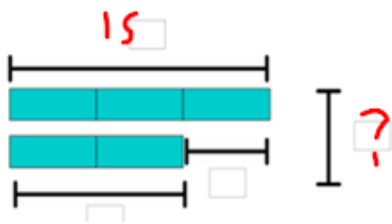
1. Alfie and Billy share 15 sweets in the ratio 3:2.
How many sweets does Billy get?



2. Alfie and Billy share 15 sweets in the ratio 3:2.
How many more sweets does Alfie get?



3. Alfie gets 15 sweets.
How many do they get altogether?



4. Alfie gets 15 more sweets than Billy.
How many sweets does Billy get?

